







hoeveel
van elk dier
tel jij?

extra
moeilijk

zoek alle zeedieren

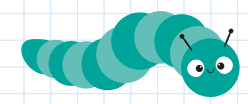




stippen tellen

tel de
stippen op de
lieveheers-
beestjes




pootjes tellen

tel de
pootjes van
de rupsen



extra
moeilijk

naar welke
luchtbel
zwemt de
vis?




1

2

3

4




de vis zwemt 3 plaatsen vooruit




4


5



7



de vis zwemt 2 plaatsen achteruit



6

7

8



de vis zwemt 2 plaatsen vooruit

zwemmende
vissen



0	0	1	1	1	2	2	2	3	3	3	4	4
4	5	5	5	6	6	6	7	7	7	8	8	8
9	9	9	10	10	10	11	11	11	12	12	12	13
14	15	16	17	18	19	20	+	-	=	+	-	=
+	-	=	•	•	•	•	••	••	••	•••	•••	•••
•••	•••	•••	•••	•••	•••	•••	✌️	✌️	✌️	✌️	✌️	✌️
✌️	✌️	✌️	✌️✌️	✌️✌️	✌️✌️	✌️✌️	✌️✌️	✌️✌️	✌️✌️	✌️✌️	✌️✌️	✌️✌️
🐯	🐼	🐰	🦁	🍭	🍬	🍭	🌀	🍬	🐎	🦁	🐼	🐊
★	🐢	🐠	🐟	🐯	🐵	🦒	🐘	🦉	🐶	🦊	🐱	🐷
🐦	🐮	🐰	🐛	🐛	🐛	🐛	🐛	🐞	🐞	🐞	🐞	🐞